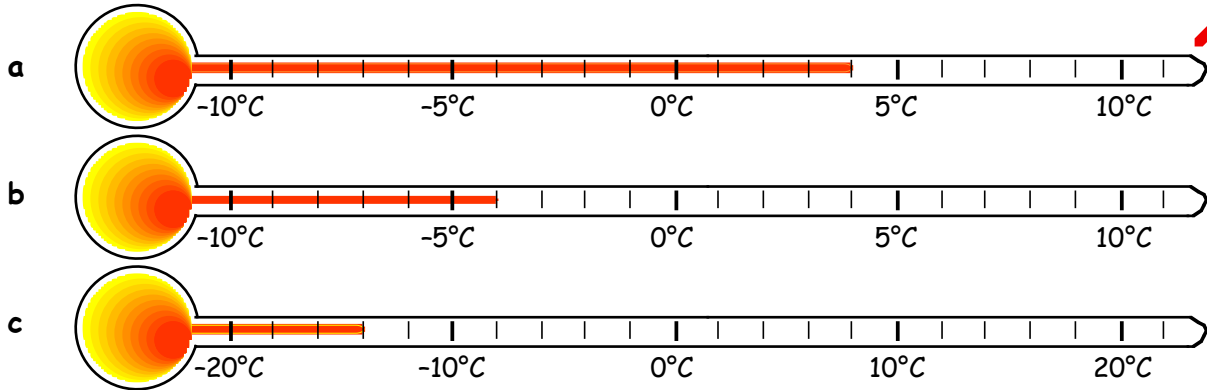


Mathematics Assessment (CfE) - Level 2

(MNU 2 - 04a)

I can show my understanding of how the number line extends to include numbers less than zero and have investigated how these numbers occur and are used.


1. Write down the temperature, in °C, for each thermometer shown below :-



2. a Jimimus Geddius was born in 21 BC and died in 33 AD.
How old was he when he died ?


b Johnia Strangia died in 20 AD at the age of 55.
What year was he born ?



3. a  Bob has £140 in the bank. He withdraws £175.
Write down his bank balance now.

b Jade has a balance of -£245. She deposits £130.
Write down her new bank balance.



c  Sanjit had £320 in his bank account on Monday.
He withdrew £120 on Tuesday and £260 on Thursday.
He deposited £80 on Friday.
Write down his new bank balance.

4. Find :-

a $6 - 8$

b $-4 + 9$

c $4 + (-2)$

d $8 + (-10)$

e $-15 + (-5)$

f $-147 + (-26)$.

5. Calculate :-

a $4 - 6 + 9 - 12$

b $-3 + 5 - 7 + (-9)$

c $-32 + (-43) + 75$

d $(-1) + (-1) + (-1) + (-1) + (-1)$

e $(-202) + 201$

f $10 - 20 + 30 - 40$.